

Use the number line to help you  
workout these three number additions.

1.  $1 + 3 + 1 =$

2.  $2 + 2 + 3 =$

3.  $2 + 4 + 2 =$

4.  $5 + 2 + 1 =$

5.  $1 + 2 + 5 =$

6.  $3 + 1 + 3 =$



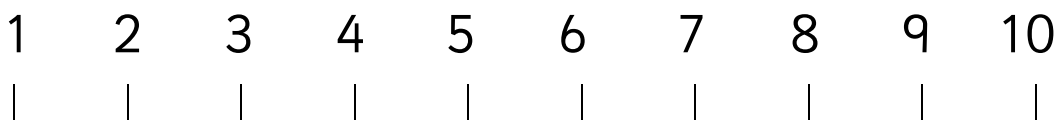
Use the number line to help you  
find the missing numbers.

7.  $4 +$    $+ 1 = 7$

8.   $+ 2 + 2 = 7$

9.  $5 +$    $+ 1 = 9$

10.   $+ 1 + 3 = 6$



Use the number line to help you  
workout these three number additions.

1.  $2 + 1 + 1 =$

2.  $3 + 2 + 1 =$

3.  $2 + 3 + 2 =$

4.  $4 + 2 + 1 =$

5.  $1 + 4 + 4 =$

6.  $2 + 2 + 3 =$



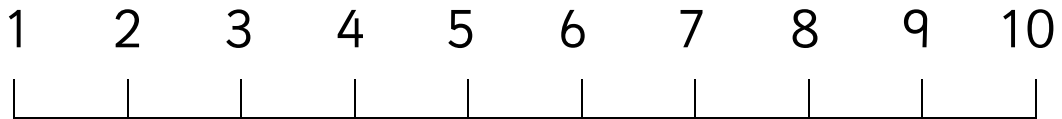
Use the number line to help you  
find the missing numbers.

7.  $2 +$    $+ 2 = 6$

8.   $+ 2 + 3 = 7$

9.  $3 +$    $+ 1 = 8$

10.   $+ 3 + 4 = 8$



Use the number line to help you  
workout these three number additions.

1.  $3 + 2 + 2 =$

2.  $1 + 3 + 3 =$

3.  $2 + 2 + 2 =$

4.  $4 + 3 + 2 =$

5.  $3 + 2 + 4 =$

6.  $5 + 2 + 2 =$



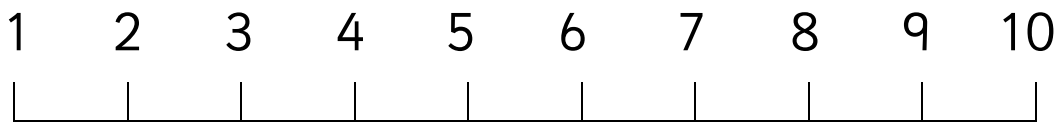
Use the number line to help you  
find the missing numbers.

7.  $3 +$    $+ 3 = 9$

8.   $+ 2 + 2 = 6$

9.  $4 +$    $+ 2 = 8$

10.   $+ 2 + 1 = 8$



Use the number line to help you  
workout these three number additions.

1.  $4 + 1 + 2 =$

2.  $6 + 2 + 1 =$

3.  $2 + 6 + 2 =$

4.  $1 + 3 + 6 =$

5.  $1 + 5 + 4 =$

6.  $2 + 4 + 3 =$



Use the number line to help you  
find the missing numbers.

7.  $1 +$    $+ 2 = 9$

8.   $+ 2 + 3 = 7$

9.  $3 +$    $+ 3 = 10$

10.   $+ 5 + 4 = 10$



## Answers

### Page 1

- |      |      |      |      |       |
|------|------|------|------|-------|
| 1. 5 | 2. 7 | 3. 8 | 4. 8 | 5. 8  |
| 6. 7 | 7. 2 | 8. 3 | 9. 3 | 10. 2 |

### Page 2

- |      |      |      |      |       |
|------|------|------|------|-------|
| 1. 4 | 2. 6 | 3. 7 | 4. 7 | 5. 9  |
| 6. 7 | 7. 2 | 8. 2 | 9. 4 | 10. 1 |

### Page 3

- |      |      |      |      |       |
|------|------|------|------|-------|
| 1. 7 | 2. 7 | 3. 6 | 4. 9 | 5. 9  |
| 6. 9 | 7. 3 | 8. 2 | 9. 2 | 10. 5 |

### Page 4

- |      |      |       |       |       |
|------|------|-------|-------|-------|
| 1. 7 | 2. 9 | 3. 10 | 4. 10 | 5. 10 |
| 6. 9 | 7. 6 | 8. 2  | 9. 4  | 10. 1 |