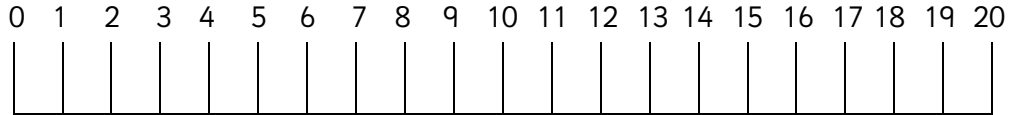


Use the number line to help with taking away from 20.

Tip: You can count back.



1. $20 - 6 =$

2. $20 - 10 =$

3. $20 - 7 =$

4. $20 - 15 =$

5. $20 - 1 =$


6. $20 - 17 =$

7. Take 3 from 20

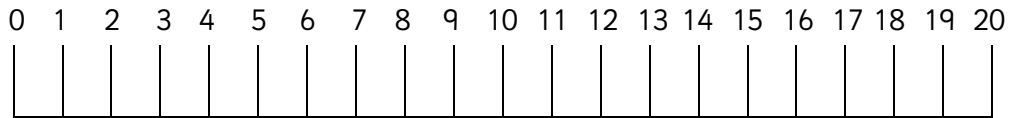
8. Take 12 from 20

9. Take 5 from 20

10. Take 16 from 20



Use the number line to help with taking away from 20.
Tip: You can count back.



1. $20 - 2 =$

2. $20 - 13 =$

3. $20 - 9 =$

4. $20 - 12 =$

5. $20 - 4 =$


6. $20 - 19 =$

7. Take 8 from 20

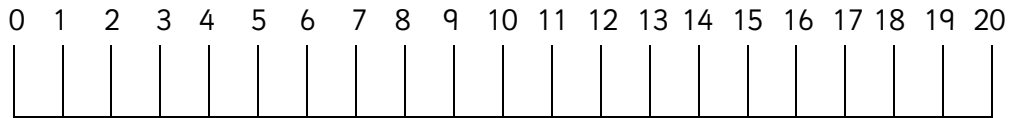
8. Take 14 from 20

9. Take 6 from 20

10. Take 20 from 20



Use the number line to help with taking away from 20.
Tip: You can count back.



1. $20 - 3 =$

2. $20 - 14 =$

3. $20 - 8 =$

4. $20 - 16 =$

5. $20 - 5 =$


6. $20 - 18 =$

7. Take 2 from 20

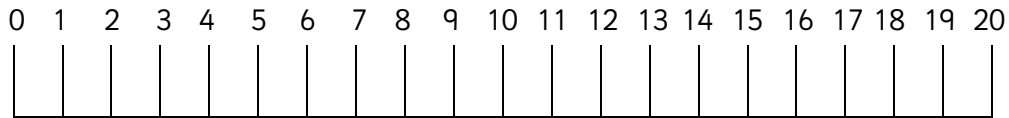
8. Take 15 from 20

9. Take 7 from 20

10. Take 11 from 20



Use the number line to help with taking away from 20.
Tip: You can count back.



1. $20 - 6 =$

2. $20 - 18 =$

3. $20 - 3 =$

4. $20 - 14 =$

5. $20 - 8 =$

6. $20 - 15 =$

7. Take 9 from 20

8. Take 17 from 20

9. Take 4 from 20

10. Take 19 from 20



Answers

Page 1

1. 14 2. 10 3. 13 4. 5 5. 19

6. 3 7. 17 8. 8 9. 15 10. 4

Page 2

1. 18 2. 7 3. 11 4. 8 5. 16

6. 1 7. 12 8. 6 9. 14 10. 0

Page 3

1. 17 2. 6 3. 12 4. 4 5. 15

6. 2 7. 18 8. 5 9. 13 10. 9

Page 4

1. 14 2. 2 3. 17 4. 6 5. 12

6. 5 7. 11 8. 3 9. 16 10. 1